

The Rainbow Fish – Story Problems Kindergarten

Result unknown

Represent numbers to 10 (separate)

Rainbow Fish had 10 shiny silver scales. He gave away 9 shiny silver scales. How many does he have now?



Rainbow Fish had 10 shiny silver scales. He gave away 0 shiny silver scales. How many does he have now?



Rainbow Fish had 10 shiny silver scales. He gave away 8 shiny silver scales. How many does he have now?











Rainbow Fish had 10 shiny silver scales. He gave away 2 shiny silver scales. How many does he have now?



The Rainbow Fish – Story Problems Kindergarten
Result unknown

Represent numbers to 10 (separate)

<p>Rainbow Fish had 10 shiny silver scales. He gave away 1 shiny silver scales. How many does he have now?</p> 	<p>Rainbow Fish had 10 shiny silver scales. He gave away 3 shiny silver scales. How many does he have now?</p> 
<p>Rainbow Fish had 10 shiny silver scales. He gave away 4 shiny silver scales. How many does he have now?</p> 	<p>Rainbow Fish had 10 shiny silver scales. He gave away 5 shiny silver scales. How many does he have now?</p> 
<p>Rainbow Fish had 10 shiny silver scales. He gave away 6 shiny silver scales. How many does he have now?</p> 	<p>Rainbow Fish had 10 shiny silver scales. He gave away 7 shiny silver scales. How many does he have now?</p> 
<p>Rainbow Fish had 10 shiny silver scales. He gave away 10 shiny silver scales. How many does he have now?</p> 	<p>Rainbow Fish had 8 shiny silver scales. He gave away 4 shiny silver scales. How many does he have now?</p> 

The Rainbow Fish – Story Problems Kindergarten

Result unknown

Represent numbers to 10 (separate)

Rainbow Fish had 7 shiny silver scales. He gave away 3 shiny silver scales. How many does he have now?



Rainbow Fish had 6 shiny silver scales. He gave away 1 shiny silver scales. How many does he have now?



Rainbow Fish had 9 shiny silver scales. He gave away 3 shiny silver scales. How many does he have now?



Rainbow Fish had 4 shiny silver scales. He gave away 4 shiny silver scales. How many does he have now?



Rainbow Fish had 5 shiny silver scales. He gave away 4 shiny silver scales. How many does he have now?



Rainbow Fish had 8 shiny silver scales. He gave away 6 shiny silver scales. How many does he have now?



Rainbow Fish had 3 shiny silver scales. He gave away 1 shiny silver scales. How many does he have now?



Rainbow Fish had 2 shiny silver scales. He gave away 0 shiny silver scales. How many does he have now?



The Rainbow Fish – Story Problems Kindergarten

Result unknown

Represent numbers to 10 (join)

Rainbow Fish has 7 shiny scales. His friend has 2 shiny scales. How many shiny scales are there altogether?



Rainbow Fish has 5 shiny scales. His friend has 5 shiny scales. How many shiny scales are there altogether?



Rainbow Fish has 6 shiny scales. His friend has 3 shiny scales. How many shiny scales are there altogether?



Rainbow Fish has 1 shiny scale. His friend has 8 shiny scales. How many shiny scales are there altogether?



Rainbow Fish has 4 shiny scales. His friend has 6 shiny scales. How many shiny scales are there altogether?



Rainbow Fish has 1 shiny scale. His friend has 3 shiny scales. How many shiny scales are there altogether?



The Rainbow Fish – Story Problems Kindergarten

Result unknown

Represent numbers to 10 (join)

<p>Rainbow Fish has 9 shiny scales. His friend has 1 shiny scale. How many shiny scales are there altogether? </p>	<p>Rainbow Fish has 3 shiny scales. His friend has 5 shiny scales. How many shiny scales are there altogether? </p>
<p>Rainbow Fish has 2 shiny scales. His friend has 8 shiny scales. How many shiny scales are there altogether? </p>	<p>Rainbow Fish has 5 shiny scales. His friend has 4 shiny scales. How many shiny scales are there altogether? </p>
<p>Rainbow Fish has 2 shiny scales. His friend has 6 shiny scales. How many shiny scales are there altogether? </p>	<p>Rainbow Fish has 6 shiny scales. His friend has 1 shiny scale. How many shiny scales are there altogether? </p>
<p>Rainbow Fish has 4 shiny scales. His friend has 4 shiny scales. How many shiny scales are there altogether? </p>	<p>Rainbow Fish has 10 shiny scales. His friend has 0 shiny scales. How many shiny scales are there altogether? </p>

Rainbow Fish had some shiny scales. His friend gave him 5 more. Now he has 9 shiny scales. How many shiny scales did Rainbow Fish start with?



Rainbow Fish has some shiny scales. He lost 3 of them. Now he has 7 left. How many shiny scales did Rainbow Fish start with?



Rainbow Fish had some shiny scales. His friend gave him 3 more. Now he has 7 shiny scales. How many shiny scales did Rainbow Fish start with?



Rainbow Fish has some shiny scales. He lost 2 of them. Now he has 5 left. How many shiny scales did Rainbow Fish start with?



Rainbow Fish had some shiny scales. His friend gave him 6 more. Now he has 10 shiny scales. How many shiny scales did Rainbow Fish start with?



Rainbow Fish has some shiny scales. He lost 8 of them. Now he has 1 left. How many shiny scales did Rainbow Fish start with?



Rainbow Fish had some shiny scales. His friend gave him 4 more. Now he has 8 shiny scales. How many shiny scales did Rainbow Fish start with?



Rainbow Fish has some shiny scales. He lost 4 of them. Now he has 3 left. How many shiny scales did Rainbow Fish start with?



Rainbow Fish had some shiny scales. His friend gave him 2 more. Now he has 6 shiny scales. How many shiny scales did Rainbow Fish start with?



Rainbow Fish has some shiny scales. He lost 5 of them. Now he has 0 left. How many shiny scales did Rainbow Fish start with?



Rainbow Fish had some shiny scales. His friend gave him 1 more. Now he has 10 shiny scales. How many shiny scales did Rainbow Fish start with?











Rainbow Fish has some shiny scales. He lost 1 of them. Now he has 8 left. How many shiny scales did Rainbow Fish start with?



The Rainbow Fish – Story Problems Kindergarten
Change unknown

Represent numbers to 10

<p>Rainbow Fish has 4 shiny scales. His friend gives him some more. Now he has 8. How many did his friend give him? </p>	<p>Rainbow Fish has 4 shiny scales. He gave away some. Now he has 1 left. How many shiny scales did he give away? </p>
<p>Rainbow Fish has 2 shiny scales. His friend gives him some more. Now he has 6. How many did his friend give him? </p>	<p>Rainbow Fish has 8 shiny scales. He gave away some. Now he has 2 left. How many shiny scales did he give away? </p>
<p>Rainbow Fish has 7 shiny scales. His friend gives him some more. Now he has 10. How many did his friend give him? </p>	<p>Rainbow Fish has 7 shiny scales. He gave away some. Now he has 4 left. How many shiny scales did he give away? </p>
<p>Rainbow Fish has 5 shiny scales. His friend gives him some more. Now he has 9. How many did his friend give him? </p>	<p>Rainbow Fish has 10 shiny scales. He gave away some. Now he has 8 left. How many shiny scales did he give away? </p>

