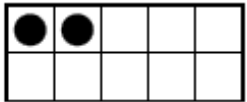


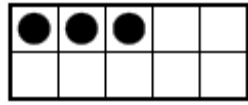


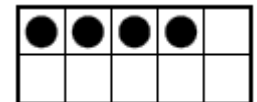

$$\begin{array}{r} 10 \\ + 2 \\ \hline \end{array}$$



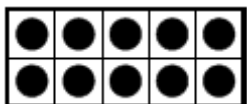
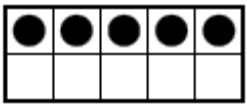
$$3 + 10 =$$



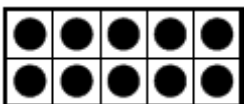
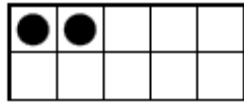
$$\begin{array}{r} 10 \\ + 4 \\ \hline \end{array}$$



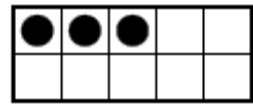

$$\begin{array}{r} 5 \\ + 10 \\ \hline \end{array}$$



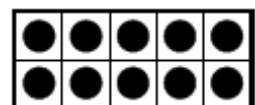
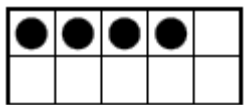
$$\begin{array}{r} 2 \\ + 10 \\ \hline \end{array}$$



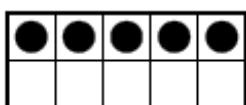

$$10 + 3 =$$



$$\begin{array}{r} 4 \\ + 10 \\ \hline \end{array}$$



$$\begin{array}{r} 10 \\ + 5 \\ \hline \end{array}$$



$$10 + 6 =$$

