




## Centipede's 100 Shoes – Story Problems Grades 3

Change unknown.



Addition facts to 1000 and the corresponding subtraction facts.

<p>The centipede had 183 shoes. After he put his shoes in boxes, he has 27 left over. How many boxes does he have?</p> 	<p>The centipede took off 219 shoes before he took a break. He then took off some more shoes. He took off 391 shoes altogether. How many shoes did he take off after his break?</p> 
<p>The centipede had 449 shoes. Some should were too tight. 38 shoes were comfortable. How many shoes were too tight?</p> 	<p>The centipede polished 634 shoes before he took a break. He then polished some more shoes. He polished 851 shoes altogether. How many shoes did he polish after his break?</p> 
<p>The centipede had 383 shoes. He left some at school. He had 254 at home. How many shoes did he leave at school?</p> 	<p>The centipede put 361 shoes in a blue bag. He then put more shoes in a red bag. He bagged up 597 shoes altogether. How many shoes did he put in the red bag?</p> 
<p>The centipede had 98 shoes. After he put his shoes in boxes, he has 12 left over. How many boxes does he have?</p> 	<p>The centipede took off 132 shoes before he took a break. He then took off some more shoes. He took off 249 shoes altogether. How many shoes did he take off after his break?</p> 

