








Ten Sly Piranhas – Story Problems Grades 1

Change unknown.

Addition facts to 20 and the corresponding subtraction facts. (Grade 1)

<p>The pond had 13 piranhas. After we put some piranhas in a tank, we had 8 left over. How many piranhas are in the tank?</p> 	<p>We caught 9 piranhas before we took a break. We then caught some more piranhas. We caught 15 piranhas altogether. How many piranhas did we catch after taking a break?</p> 
<p>The pond had 19 piranhas. Some piranhas were swimming in circles. 8 piranhas were swimming backwards. How many piranhas were swimming in circles?</p> 	<p>We caught 14 piranhas before we took a break. We then caught some more piranhas. We caught 20 piranhas altogether. How many piranhas did we catch before taking a break?</p> 
<p>The pond had 11 piranhas. Some piranhas were swimming in circles. 4 piranhas were swimming backwards. How many piranhas were swimming in circles?</p> 	<p>We released 8 piranhas into the lake. We released more piranhas in a pond. We released 19 piranhas altogether. How many piranhas did we put in the pond?</p> 
<p>The pond had 13 piranhas. After we put some piranhas in a tank, we had 2 left in the pond. How many piranhas are in the tank?</p> 	<p>We released 6 piranhas into the lake. We released more piranhas in a pond. We released 14 piranhas altogether. How many piranhas did we put in the pond?</p> 