








Ten Sly Piranhas – Story Problems Grades 3

Change unknown.

Addition to 1000 and the corresponding subtraction facts. (Grade 3)

<p>The pond had 183 piranhas. After we put some piranhas in a tank, we had 27 left in the pond. How many piranhas are in the tank?</p> 	<p>We caught 219 piranhas before we took a break. We then caught some more piranhas. We caught 441 piranhas altogether. How many piranhas did we catch after taking a break?</p> 
<p>The pond had 459 piranhas. Some piranhas were swimming in circles. 318 piranhas were swimming backwards. How many piranhas were swimming in circles?</p> 	<p>We caught 324 piranhas before we took a break. We then caught some more piranhas. We caught 517 piranhas altogether. How many piranhas did we catch after taking a break?</p> 
<p>The pond had 520 piranhas. Some piranhas were swimming in circles. 189 piranhas were swimming backwards. How many piranhas were swimming in circles?</p> 	<p>We released 261 piranhas into the lake. We released more piranhas in a pond. We released 697 piranhas altogether. How many piranhas did we put in the pond?</p> 
<p>The pond had 250 piranhas. After we put some piranhas in a tank, we had 112 left in the pond. How many piranhas are in the tank</p> 	<p>We released 410 piranhas into the lake. We released more piranhas in a pond. He released 642 piranhas altogether. How many piranhas did we put in the pond?</p> 